

ADARSH PUBLIC SCHOOL

Holiday Home Work 2019-20

Class – IIIrd

1. Hindi :-

1. किन्ही 10 शब्दों को वाक्य में प्रयोग कीजिए ।
2. 15 शब्दों के विलोम शब्द लिखिए ।
3. कॉपी में 10 पृष्ठ सुलेख लिखिए ।
4. A-4 सीट पर रसोई घर में प्रयोग होने वाली 5 चीजों के चित्र चिपकाओं ।
5. A-4 सीट पर 5 फूलों के नाम लिखो और चित्र भी चिपकाओं ।

2. E.V.S :-

1. Draw Maternal and paternal family tree. Make it attractive by pasting pictures.
2. Write a short notes / Paragraph on “ Family is everything for me”
3. Collect information and picture of some famous “Special people” What are the achievements? Prepare a report on any one of them and paste the related picture.
4. How can you help your mother at home? Discuss and write here?
5. “Each one – Teach one” Discuss the importance of education.
6. Make a collage of games played by you in your copy.
7. Write the name of your favourite sports person. Also write the games he plays. Briefly Describe about the game too.
8. Name any 4 plants that you see in your surrounding and picture also.
9. Un jumble these words related to plants.
RTEE _____ WELROF _____ FELA _____
SAGRS _____ FTRIU _____ GTIW _____
SBHU _____ EHRB _____ ESDE _____
MSSO _____
10. What would happen if there were no plants. Discuss
11. Do activity from Page No. 40 of your EVS Note book.
12. Do all Question / Answer and exercise in holiday home work of Lesson 1 , 2 , 3 , 4 And learn them.
13. Collect some waste cloth , paper , dry leaves and cotton and make a cozy nest.
14. Collect picture of 5 each.
 - a) Carnivore animals
 - b) Herbivore animals
 - c) Omnivore animals
 - d) Scavengers

3. Maths:-

Write the consecutive numbers that come after.

- a. 467 _____, _____, _____, _____, _____, _____
- b. 5782 _____, _____, _____, _____, _____, _____
- c. 6893 _____, _____, _____, _____, _____, _____
- d. 7840 _____, _____, _____, _____, _____, _____

Write the number for the following.

- a. Eight hundred and forty three
- b. Six thousand four hundred and thirty – two
- c. Nine thousand and six
- d. Eight – four thousand seven hundred and twelve

Write the number name for the following.

- a. 4301 b. 9987 c. 3942 d. 7896

Write in the expanded form.

- a. 4362 b. 5607 c. 3946 d. 7080

Fill in the blanks with > , = or < .

- a. 6243 _____ 2463 b. 2972 _____ 6842 c. 1234 _____ 1234 d. 5376 _____ 7531

Write the number

	Smallest	Largest
a. One - digit	_____	_____
b. Two – digits	_____	_____
c. Three – digits	_____	_____
d. Four – digits	_____	_____

Fill in the blanks:-

- a. _____ comes just before 8000.
- b. 2000 comes just after _____.
- c. _____ comes just before 8880.
- d. 2345 comes just after _____.

Write the numbers between 4536 and 4546

Write the following numbers in short term.

- a. $8000 + 500 + 40 + 6 =$
- b. $6000 + 200 + 80 + 2 =$
- c. $9000 + 300 + 30 + 0 =$
- d. $4000 + 400 + 00 + 0 =$

Write the following numbers in descending order.

- a. 777,7,80,8888 b. 456,1034,85,7
- c. 9,11,2765,999,3000 d. 80,8,8989,8008,8080

Add :-

$\begin{array}{r} 3783 \\ + 5649 \\ \hline \end{array}$	$\begin{array}{r} 4572 \\ + 3981 \\ \hline \end{array}$	$\begin{array}{r} 2254 \\ + 6693 \\ \hline \end{array}$	$\begin{array}{r} 8365 \\ + 1043 \\ \hline \end{array}$
---	---	---	---

P.T.O

Convert

- a) 6000 ML into L b) 2003 ML into L and ML
c) 3 L 472 ML into ML d) 7777 ML into L and ML

A Library has 4003 school books, 3246 work books and 1248 reference books. Find the total number of books in the library.

Find the number of toffees in 120 boxes with 24 toffees in each box.

Find the product of greatest 3 – digit number and 36.

Find the product of the smallest 3 digit number and the greatest 2 – digit number.

798 litres of milk is to be sent to town in 15 litres cans. What is the least number of cans that will be required ? How much milk will there be in the can that is not full?

808 kg of rice was packed in bags of 100 kg each. How many bags of rice were packed and how much rice was left unpacked?

A girl strings 10 flowers to make a garland. If there are 508 flowers, find the number of garlands made and number of flowers left.

Fill in the blanks with am or pm.

- a) Two hours before 12 noon is _____
b) Three hours before 12 midnight is _____

Convert into days.

- a) 3 weeks 3 days c) 3 months 13 days
b) 7 weeks 5 days d) 4 months 18 days

Convert into hours.

- a) 6 days b) 4 days c) 5 days 12 hours d) 14 days and 3 hours

Write in words.

- a) ₹ 76.76 b) ₹ 37.20 c) ₹ 6.04

Write in figures.

- a) Seventy – four rupees and sixty paise.
b) Sixty rupees and eighty paise
c) Eighty – nine rupees and eighty paise.
d) Thirty rupees and seventy paise.

Daily do 5 questions.

Add	Divide	After , Before , Between	Place Value
Subtract	Number name	Successor and Predecessor	
Multiplication	Ascending / Descending order	Expanded form	

P.T.O

Subtract :-

$$\begin{array}{r} 4649 \\ -2783 \\ \hline \end{array}$$

$$\begin{array}{r} 3582 \\ -2961 \\ \hline \end{array}$$

$$\begin{array}{r} 7894 \\ -4255 \\ \hline \end{array}$$

$$\begin{array}{r} 8701 \\ -7654 \\ \hline \end{array}$$

Solve :-

a) $582 + 452 + 67$

b) $452 + 564 + 29 + 36$

c) $2345 + 468 + 108$

d) $4060 + 3743 + 465$

e) $694 + 503 - 326$

f) $854 - 268 - 527$

g) $783 - 792 + 99$

h) $5796 - 6823 + 2425$

Find the product.

a) 9127×8

b) 569×6

c) 326×45

d) 543×27

e) 8735×2

f) 9327×6

Divide the following using long division method. Check your answer by multiplying the quotient and divisor.

a. $36 \div 8$

b. $44 \div 11$

c. $9690 \div 3$

d. $2495 \div 5$

e. $8141 \div 7$

f. $1693 \div 14$

Divide the following and check your answer.

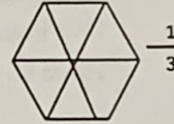
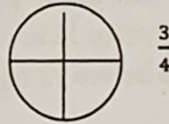


a. $2496 \div 20$

b. $4649 \div 18$

c. $5798 \div 17$

d. $2693 \div 14$

Colour the show the fractions.



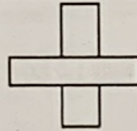
Write T if the fraction is shaded correctly. If not, write F



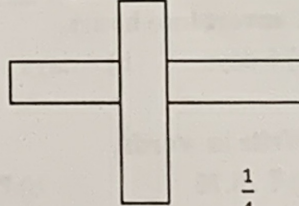
$\frac{1}{2}$



$\frac{1}{3}$



$\frac{1}{2}$



$\frac{1}{4}$

Convert

a) 3448 m into km and m

b) 2 km 564 m into m

c) 61 m 45 cm into cm

d) 3276 cm into m and cm

Convert

a) 8000 g into kg

b) 2003 g into kg and g

c) 6 kg 200 g into g

d) 2500 g into kg and g

P.T.O

Learn and write daily 1 table from 1 to 20 (3 times)

Practice Lesson 1 , 2 , 3 of your text book in Holiday homework copy all exercise.

Solve Puzzle which come in newspaper like Brain games , SUDOKU , Cut in and paste in copy (Daily 2)

Learn and write (5 times)

- a) 1 metre = 100 centimetre
- b) 1 kilometre = 1000 metre
- c) 1 kilogram = 1000 gram
- d) 1 Litre = 1000 millilitres

Name 5 things we buy in grams and 5 things we buy in kilograms.

List 3 things that we need at least 1 litre each a day.

Go to a near by shop with your Parents and watch how the shopkeeper makes bills. Sometimes they are written by hand and sometimes they are computerized collect different types of bills and paste them in Holiday home work copy.

4. English :-

This Homework carry 10 marks which is included in Half yearly exams.

- 1. From word meaning sheet learn their meaning. After that choose any word and make sentences.
- 2. Sentence which you formed underline subject (S) and Predicate (P)
- 3. Write 20 Page writing.
- 4. Write a poem and its picture in A3 size sheet colour it also.
 - 1. The fun fair (Page 13)
 - 2. Miss Molly (Page 20)

5. G.K:-

Write daily 10 current affairs like sports , Politices , Economy , Obittuaries , Banking , International Affaire etc.

Write capital and currency and country name.

Make a list on paper and learn them. { Fit least 100 country } For example

Country	Capital	Currency
Australia	Canberra	Australian Dollar
.....

Make a table of India's state and capital in copy and learn them.

Make a list or table of .

- 1. All important national or International day with date and months and years.
- 2. Write all states chief ministers and governer's name of India and learn.
- 3. Paste the flag's of country and continents in copy.
- 4. Many cities in India have had their name changed . Make a list of new and old name of cities.

For example – Kolkata is the new name for Calcutta.
- 5. Make 5 painting with water colour in file. (Art)

P.T.O

6. Visit your Kitchen and Collect bottles of pickles , James , Chutneys , Cheese , Milk etc.
Read the information given on their cover's and complete the following table.

Name of food Items	Date of Manufacture	Date of Expiry	Preservatives used

7. Prepare a project on Malaria. Name it – “Treat for Mosquitoes”

6. **Computer :-**

1. Do learn Chapter -1 Question / Answer and Book Exercise
2. Draw Input devices on A – 4 sheet Paper name them and also colour them.
3. Draw Output devices on A- 4 sheet paper name them and also colour them.